

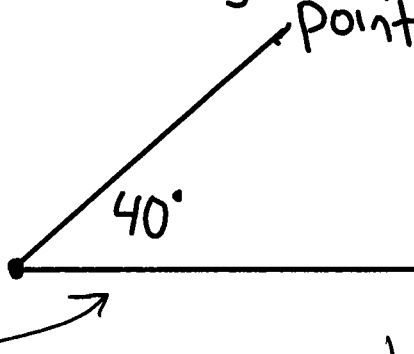
Notes March 9

Drawing & Measuring Angles

Drawing Create a zero line and a starting point. Put the gun sight on starting point & measure angle


Not Here!
↙

★ HORIZONTAL TO THE RIGHT ALWAYS!

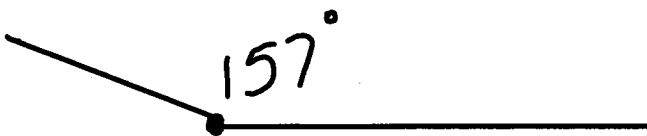


Draw 40°

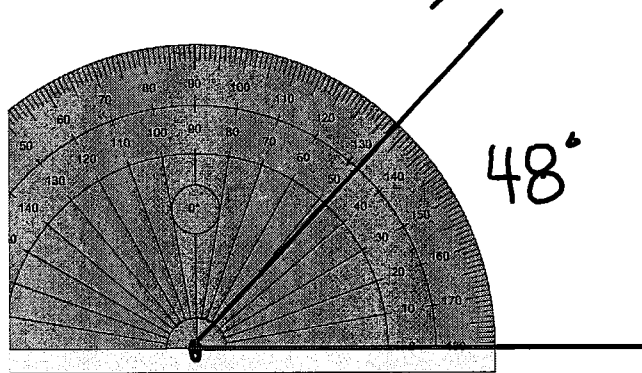
★ ANGLES GO COUNTERCLOCKWISE FROM THE HORIZONTAL ZERO LINE!



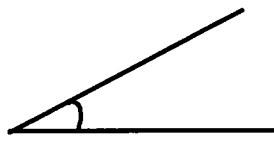
Draw 157°



Read Angles

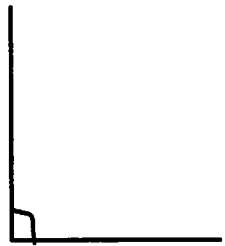


Types of Angles



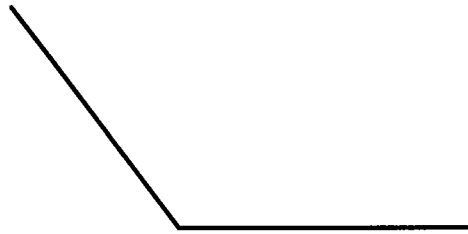
Between $0 + 89^\circ$

Acute Angle



90°

Right Angle

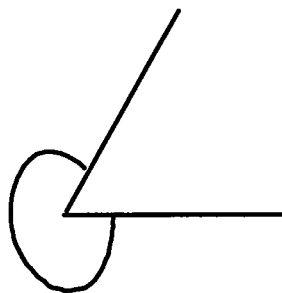


Between $91 + 179$
degrees.

Obtuse Angle



180°
Straight Angle



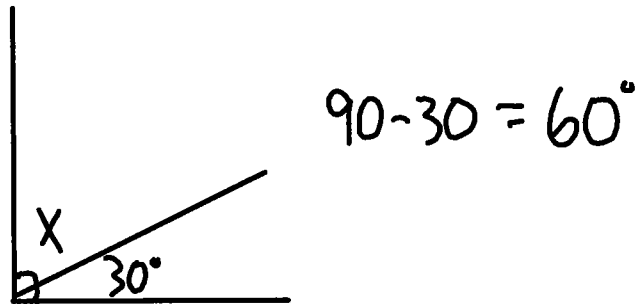
Between $181 + 359$

Reflex Angle.

Finding Angles with math:

2 Types:

Right Angle Questions



Straight Line Questions

