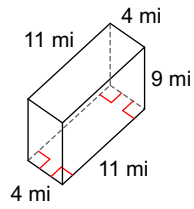


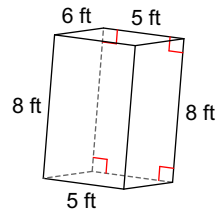
# Volume of Prisms and Pyramids

Find the volume of each figure. Round your answers to the nearest hundredth, if necessary.

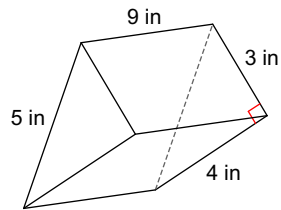
1)



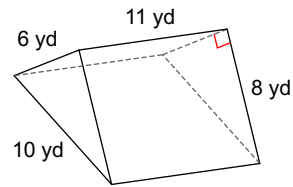
2)



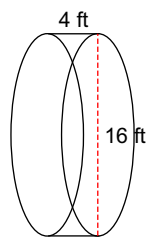
3)



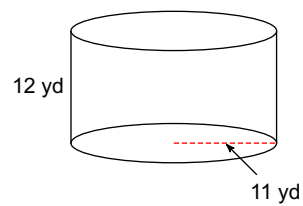
4)



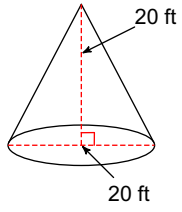
5)



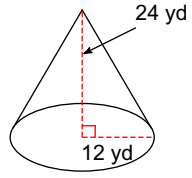
6)



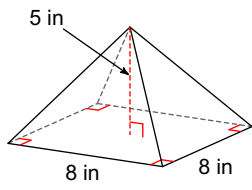
7)



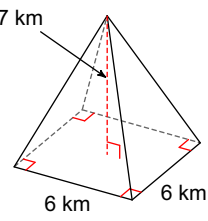
8)



9)



10)



## Answers to Volume of Prisms and Pyramids

- |                          |                           |                          |                           |
|--------------------------|---------------------------|--------------------------|---------------------------|
| 1) $396 \text{ mi}^3$    | 2) $240 \text{ ft}^3$     | 3) $54 \text{ in}^3$     | 4) $264 \text{ yd}^3$     |
| 5) $804.25 \text{ ft}^3$ | 6) $4561.59 \text{ yd}^3$ | 7) $2094.4 \text{ ft}^3$ | 8) $3619.11 \text{ yd}^3$ |
| 9) $106.67 \text{ in}^3$ | 10) $84 \text{ km}^3$     |                          |                           |