

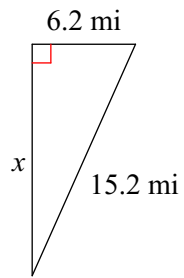
# Quiz 7.2

Name \_\_\_\_\_

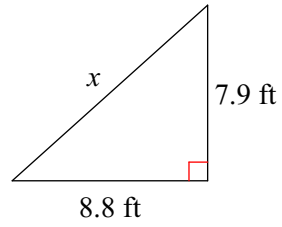
© 2018 Kuta Software LLC. All rights reserved.

**Find the missing side of each triangle. Round your answers to the nearest tenth if necessary.**

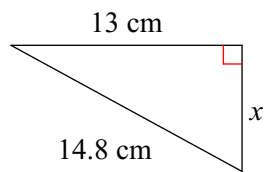
1)



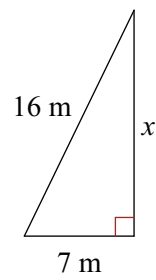
2)



3)

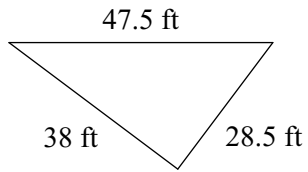


4)

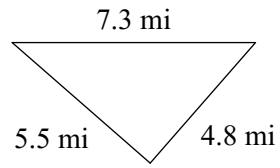


State if each triangle is a right triangle.

5)

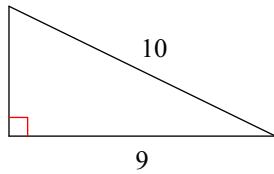


6)



Find the area of each triangle.

7)



8)

