

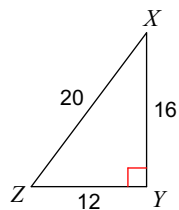
# Quiz 7.1

Name \_\_\_\_\_

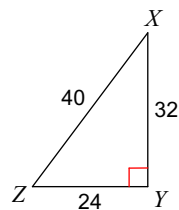
© 2018 Kuta Software LLC. All rights reserved.

**Find the value of each trigonometric ratio.**

1)  $\tan Z$

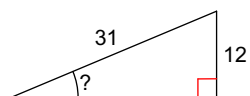


2)  $\tan Z$

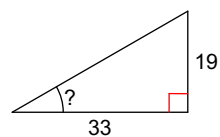


**Find the measure of the indicated angle to the nearest degree.**

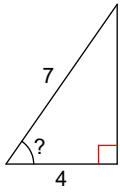
3)



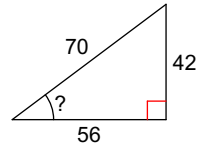
4)



5)

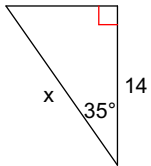


6)

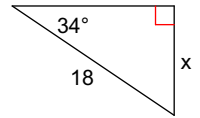


**Find the missing side. Round to the nearest tenth.**

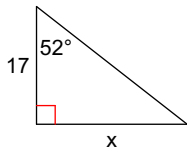
7)



8)



9)



10)

