

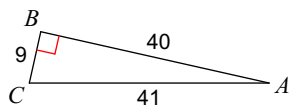
Quiz 7.0

Name _____

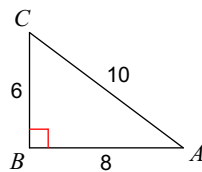
© 2018 Kuta Software LLC. All rights reserved.

Find the value of each trigonometric ratio to the nearest ten-thousandth.

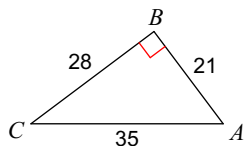
1) $\sin C$



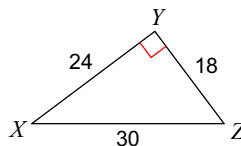
2) $\sin A$



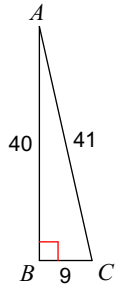
3) $\cos C$



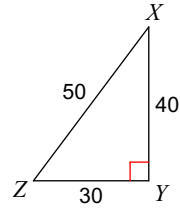
4) $\tan X$



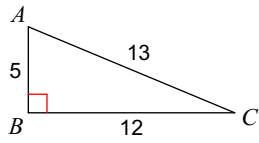
5) $\cos C$



6) $\tan Z$



7) $\sin C$



8) $\sin X$

