


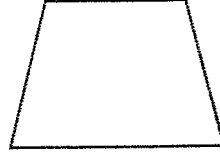
Quiz 6.3

Name _____

1. Draw a 1:3 scale image of the object

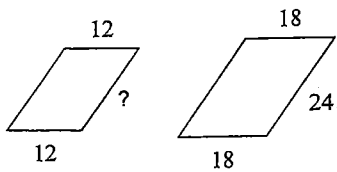


2. Draw a 5:2 scale image of the object

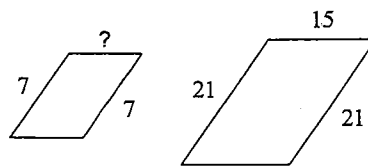


The polygons in each pair are similar. Find the missing side length.

3)

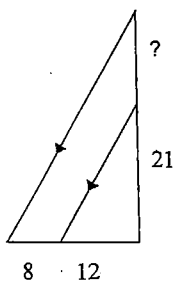


4)



Find the missing length indicated.

5)



6)

