

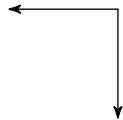
Quiz 5.1

Name _____

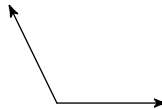
© 2018 Kuta Software LLC. All rights reserved.

Classify each angle as acute, obtuse, right, or straight.

1)



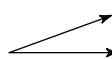
2)



3)



4)



5) 150°

6) 180°

7) 37°

8) 90°

Draw an angle with the given measurement.

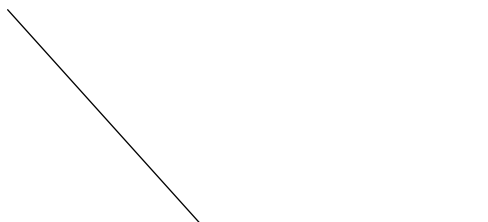
9) 69°

10) 139°




Find the measure of each angle to the nearest degree.

11)

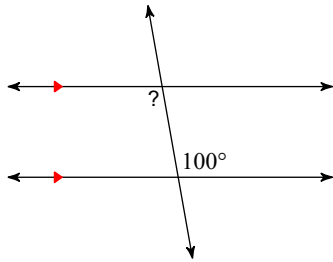


12)

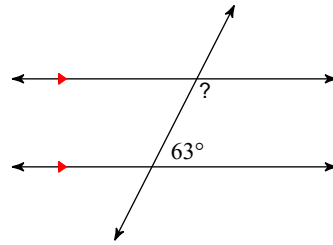


Find the measure of each angle indicated.

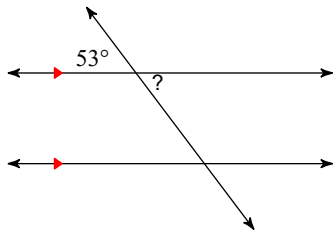
13)



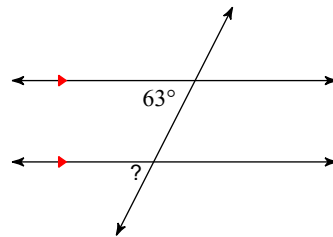
14)



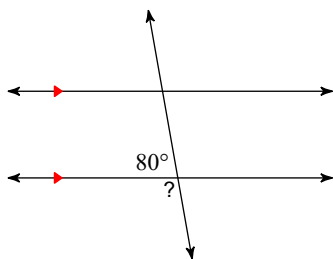
15)



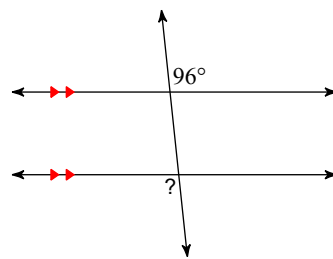
16)



17)

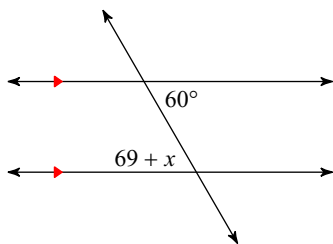


18)



Solve for x .

19)



20)

