

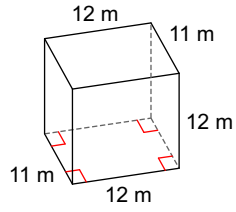
Quiz 3.10

Name _____

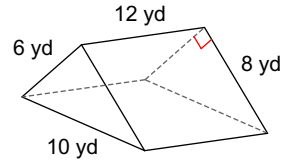
© 2018 Kuta Software LLC. All rights reserved.

Find the volume of each figure. Round your answers to the nearest hundredth, if necessary.

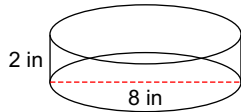
1)



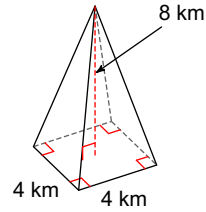
2)



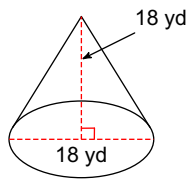
3)



4)



5)



6) Convert 90 cubic feet into cubic yards

7) Convert 800 cubic cm into cubic inches

8) Convert 18 cubic km into cubic yards