

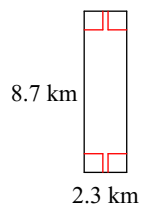
Quiz 3.8

Name _____

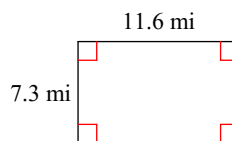
© 2018 Kuta Software LLC. All rights reserved.

Find the area of each.

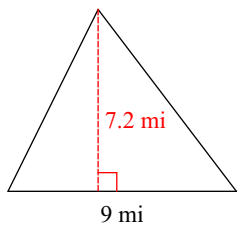
1)



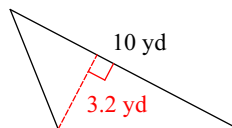
2)



3)

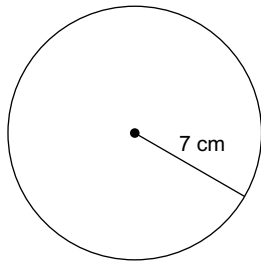


4)



Find the area of each. Use your calculator's value of π . Round your answer to the nearest tenth.

5)



6)

