

Quiz 3.6

Name _____

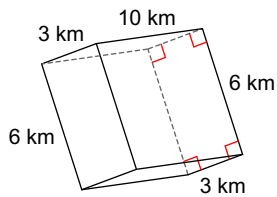
© 2018 Kuta Software LLC. All rights reserved.

1) Convert 95km/h into feet per second.

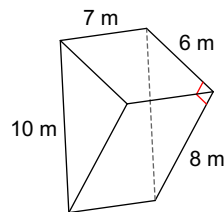
2) Convert \$75.99 per square metre into cost per square foot.

Find the surface area of each figure. Round your answers to the nearest hundredth, if necessary.

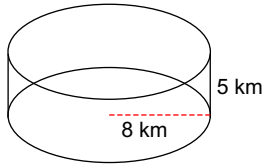
3)



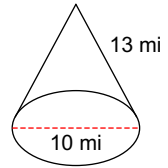
4)



5)



6)



7)

