

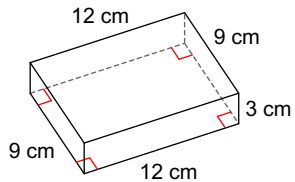
Quiz 3.5

Name _____

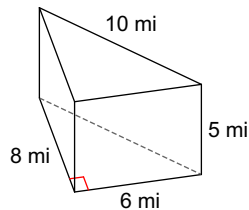
© 2018 Kuta Software LLC. All rights reserved.

Find the surface area of each figure. Round your answers to the nearest hundredth, if necessary.

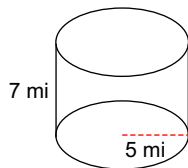
1)



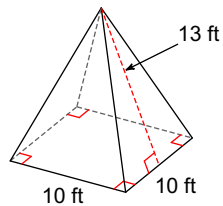
2)

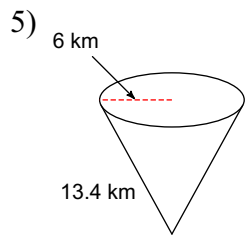


3)



4)





Convert the following square measurements

6) Convert 6 square feet into square inches.

7) Convert 3.2 square km into square miles.

8) Convert $4m^2$ into square inches.

9) Convert $179000m^2$ into square miles.