

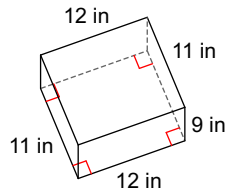
# Quiz 3.4 b

Name \_\_\_\_\_

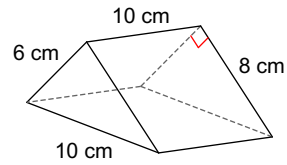
© 2017 Kuta Software LLC. All rights reserved.

**Find the surface area of each figure. Round your answers to the nearest hundredth, if necessary.**

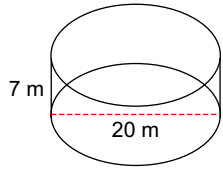
1)



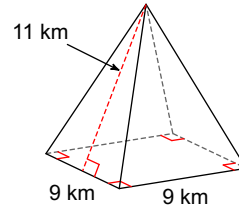
2)



3)



4)



5)

