

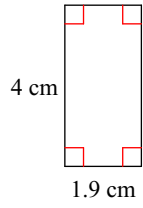
Quiz 3.3

Name _____

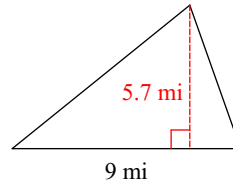
© 2017 Kuta Software LLC. All rights reserved.

Find the area of each.

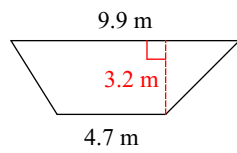
1)



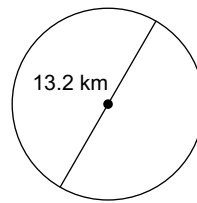
2)



3)

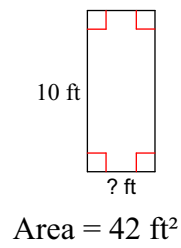


4)

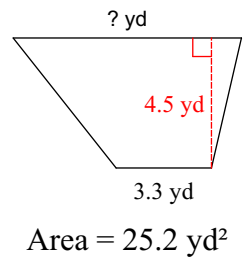


Find the missing measurement. Round your answer to the nearest tenth.

5)



6)



Find the radius of the circle.

7) area = 124.7 in²

Find the surface area of the rectangular prism

8)

