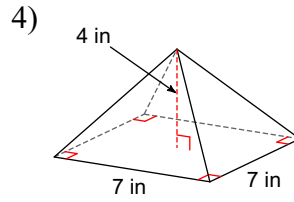
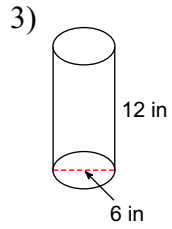
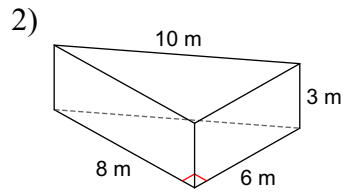
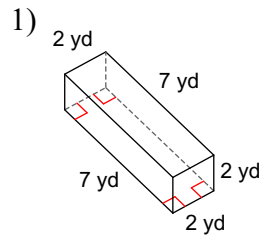


Quiz 3.10

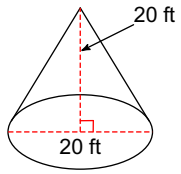
Name _____

© 2018 Kuta Software LLC. All rights reserved.

Find the volume of each figure. Round your answers to the nearest hundredth, if necessary.



5)



6) Convert 9 cubic inches into cubic feet

7) Convert 800 cubic metres into cubic feet

8) Convert 18 cubic yards into cubic cm