

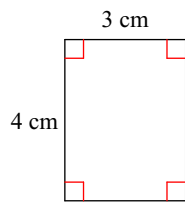
Ch 3 Review Quiz

© 2018 Kuta Software LLC. All rights reserved.

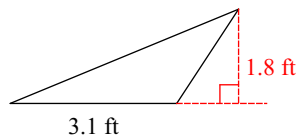
Name _____

Find the area of each.

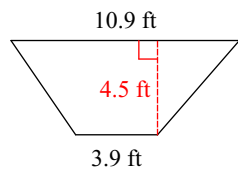
1)



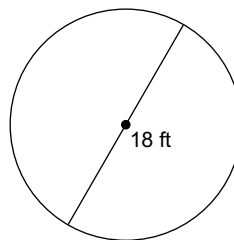
2)



3)



4)

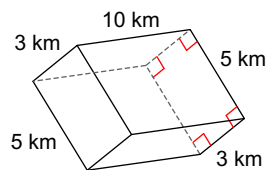


5) Convert 700 feet into inches.

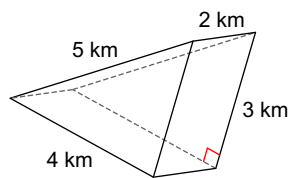
6) Convert 50m into yards.

Find the surface area of each figure. Round your answers to the nearest hundredth, if necessary.

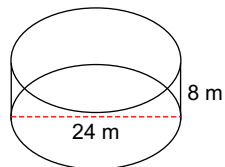
7)



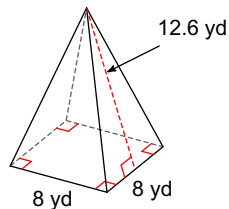
8)



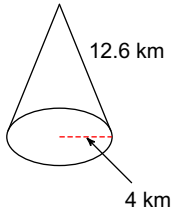
9)



10)



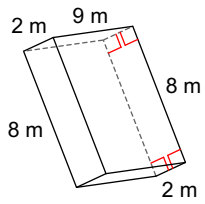
11)



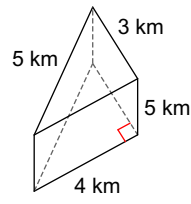
12) Convert 60 square km into square miles.

Find the volume of each figure. Round your answers to the nearest hundredth, if necessary.

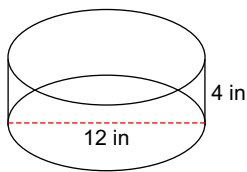
13)



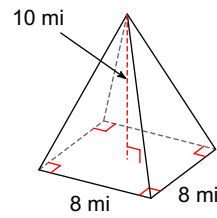
14)



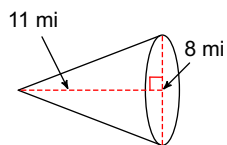
15)



16)



17)



18) Convert 7 cubic feet into cubic cm.