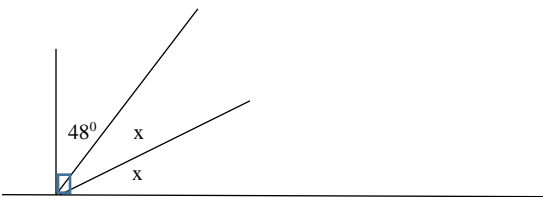


1. Complete the Table

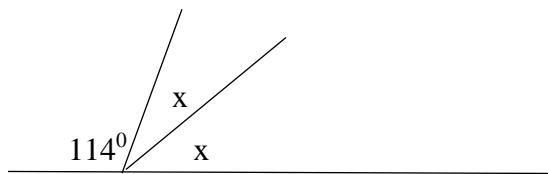
Angle Measure	Angle Type	Complement of Angle	Supplement of Angle	Bisected Angle Measure
30°				
		25°		
			62°	
				45°

Determine the Measure of Angle x

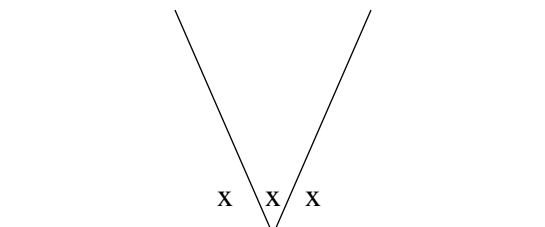
2.



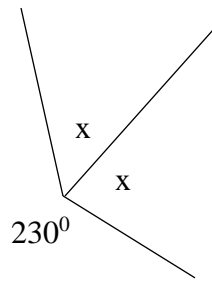
3.



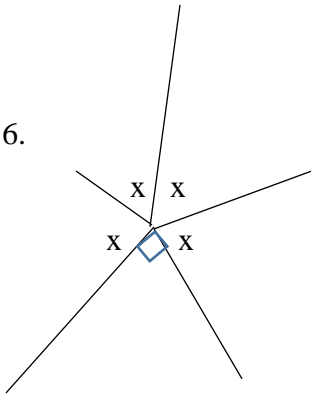
4.



5.



6.



Answers

Angle Measure	Angle Type	Complement of Angle	Supplement of Angle	Bisected Angle Measure
30°	Acute	60	150	15
65	Acute	25°	115	32.5
118	Obtuse	NA	62°	59
90	Right	NA	90	45°

2. $x=21$ 3. $x=33$ 4. $x=60$ 5. 65 6. 67.5