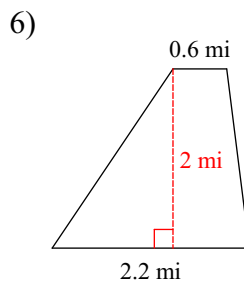
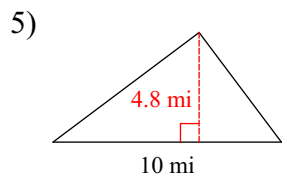
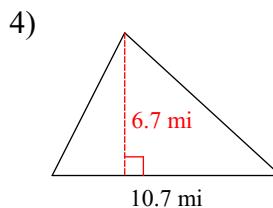
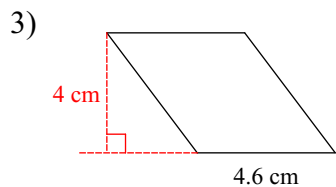
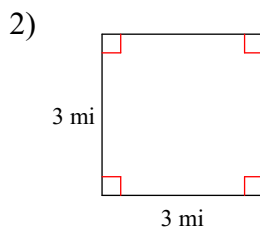
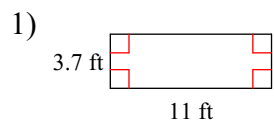


2D Area Review

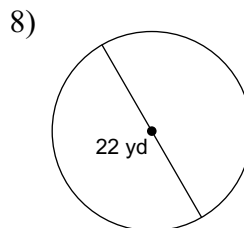
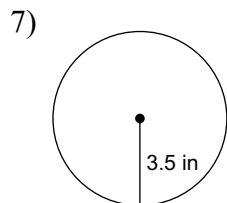
© 2017 Kuta Software LLC. All rights reserved.

Name _____

Find the area of each.

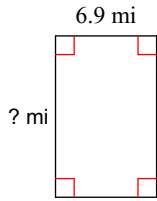


Find the area of each. Use your calculator's value of π . Round your answer to the nearest tenth.



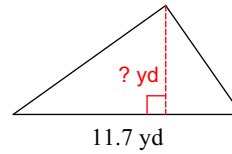
Find the missing measurement. Round your answer to the nearest tenth.

9)



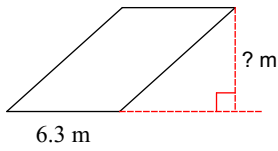
Area = 75.9 mi²

10)



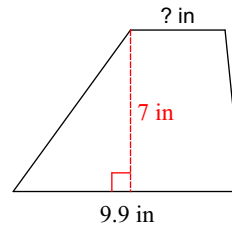
Area = 32.8 yd²

11)



Area = 36.5 m²

12)



Area = 49 in²

Find the radius of the circle. Use your calculator's value of π . Round your answer to the nearest tenth.

13) area = 78.5 km²

Find the diameter of the circle. Use your calculator's value of π . Round your answer to the nearest tenth.

14) area = 452.4 mi²

Answers to 2D Area Review

1) 40.7 ft^2

5) 24 mi^2

9) 11 mi

13) 5 km

2) 9 mi^2

6) 2.8 mi^2

10) 5.6 yd

14) 24 mi

3) 18.4 cm^2

7) 38.5 in^2

11) 5.8 m

4) 35.845 mi^2

8) 380.1 yd^2

12) 4.1 in